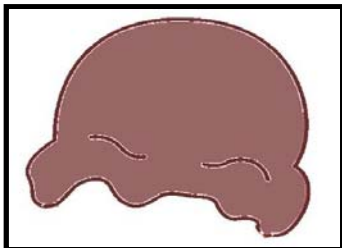



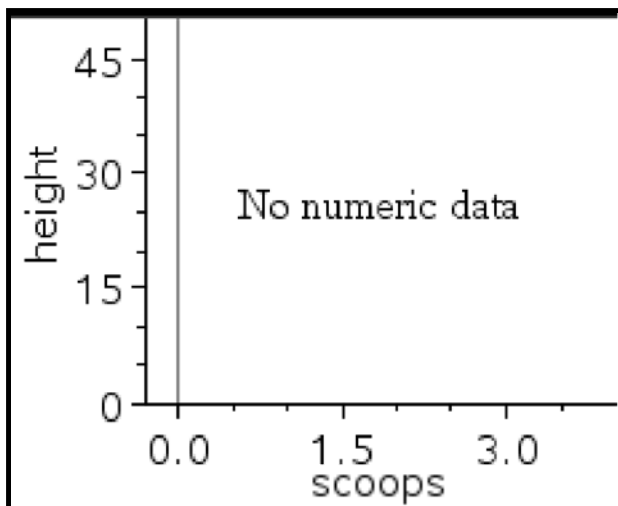
My Own Ice Cream Cone

You have been given a "cone" and some "scoops" to make your own ice cream cone. Measure the cone first and enter its height into the spreadsheet.

	A scoops	B height	C	D
1	0			
2	1			
3	2			
4	3			



Next, measure the height of your cone after adding one scoop of ice cream to it. Repeat for a total of 2 scoops. Predict the height of the cone with 3 scoops.



After deciding what your slope and y-intercept are, write an equation in $y = mx + b$ form to match the data.

y = |