
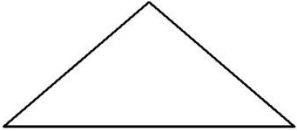

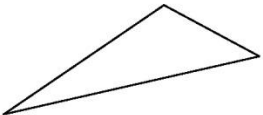

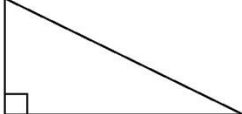
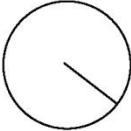
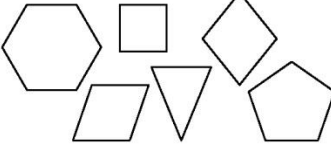




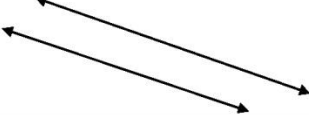
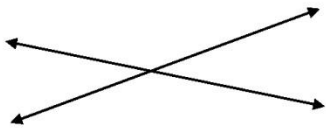

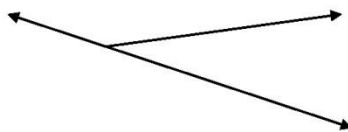
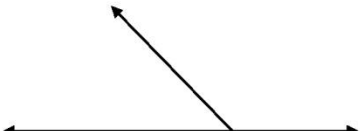
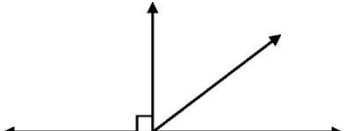
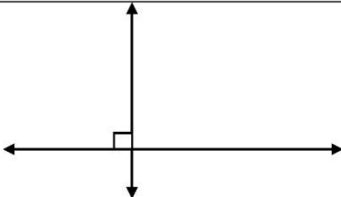



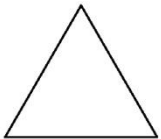
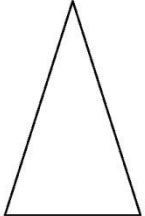
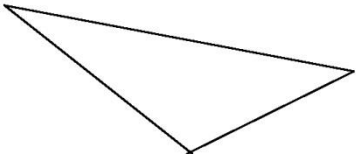
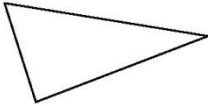

<i>MULTISENSORY MATH</i>		<i>MULTISENSORY MATH</i>	
Geometry: Visual Dictionary			
	Square Attributes: _____ _____ _____		Isosceles Triangle Attributes: _____ _____ _____
	Rectangle Attributes: _____ _____ _____		Scalene Triangle Attributes: _____ _____ _____
	Circle Attributes: _____ _____ _____		Right Triangle Attributes: _____ _____ _____
	Radius _____ _____ _____		Polygon Attributes: _____ _____ _____
	Diameter _____ _____ _____		Acute Angle _____ _____
	Equilateral Triangle Attributes: _____ _____ _____		Obtuse Angle _____ _____
			Parallel Lines _____ _____

MULTISENSORY MATH

Geometry: Visual Dictionary

	<p>Vertical Angles</p> <ul style="list-style-type: none"> • Form an hour glass shape • Are congruent
	<p>Adjacent Angles</p> <ul style="list-style-type: none"> • Share a vertex • Are next to each other
	<p>Linear Pair</p> <ul style="list-style-type: none"> • Adjacent Angles • Common sides form a line • Are supplementary
	<p>Supplementary</p> <ul style="list-style-type: none"> • Sum to 180°
	<p>Complementary</p> <ul style="list-style-type: none"> • Sum to 90°
	<p>Perpendicular Lines</p> <ul style="list-style-type: none"> • Form 90° angles

MULTISENSORY MATH

	<p>Co-linear</p> <ul style="list-style-type: none"> • co- _____ • -line _____
	<p>Equilateral Triangle</p> <ul style="list-style-type: none"> • _____
	<p>Isosceles Triangle</p> <ul style="list-style-type: none"> • _____
	<p>Scalene Triangle</p> <ul style="list-style-type: none"> • _____
	<p>Acute Triangle</p> <ul style="list-style-type: none"> • _____
	<p>Obtuse Triangle</p> <ul style="list-style-type: none"> • _____

MULTISENSORY MATH

Angle Relationships

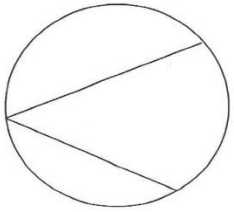
	<p>Alternate Interior Angles</p> <ul style="list-style-type: none"> • _____
	<p>Alternate Exterior Angles</p> <ul style="list-style-type: none"> • _____
	<p>Corresponding Angles</p> <ul style="list-style-type: none"> • _____
	<p>Vertical Angles</p> <ul style="list-style-type: none"> • _____
	<p>Supplementary Angles</p> <ul style="list-style-type: none"> • _____
	<p>Complementary Angles</p> <ul style="list-style-type: none"> • _____

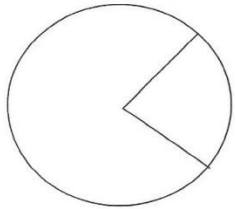
MULTISENSORY MATH

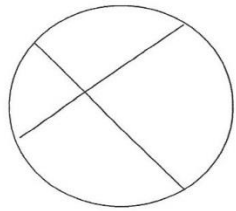
Can You Recognize Angle Relationships When Parallel Lines Are In A Different Position?

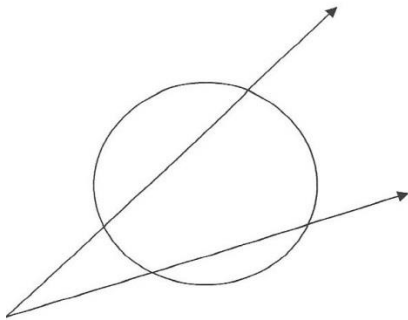
Color code an angle pair. State the relationship name. State the relationship.
 Ex. Alternate Interior Angles are congruent.

Circles: What I Need To Know

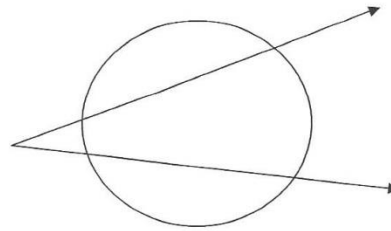


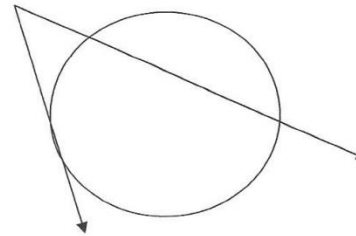


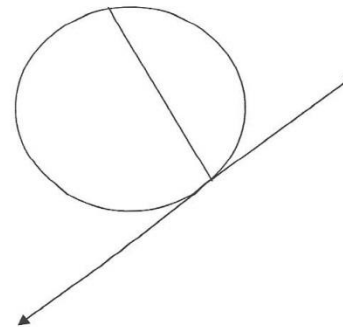




Circles: What I Need To Know







Multisensory Math

Congruence of Triangles: Color Code Each Set of Triangles to Prove Congruence.

SSS


SAS

ASA

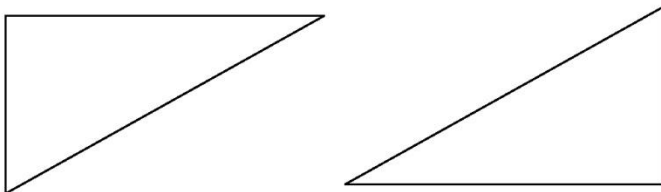
AAS

HL

SIDE – SIDE - SIDE

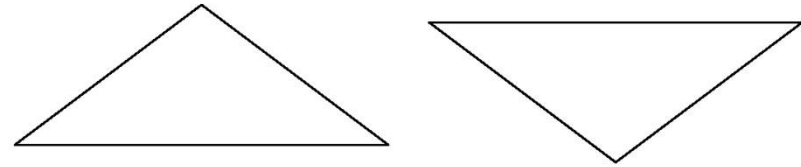


SIDE – ANGLE – SIDE

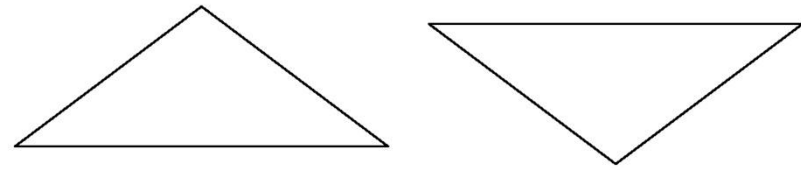


Multisensory Math

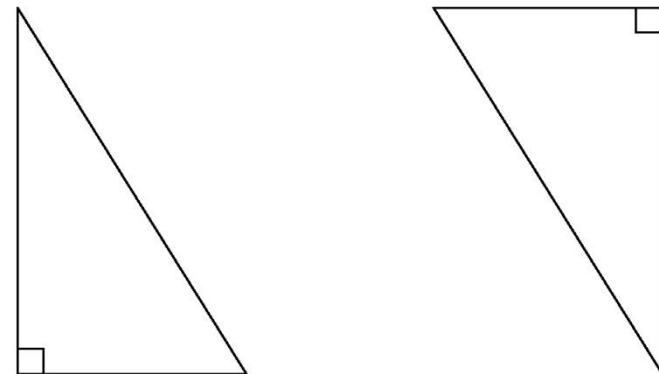
ANGLE – SIDE – ANGLE




ANGLE – ANGLE – SIDE





HYPOTENUSE – LEG




Circles: What I Need To Know










Created by Marilyn Zecher, CALT Copyright©2009


C-44 Parallelogram Opposite Angles Conjecture

The opposite angles of a parallelogram are congruent.



C-45 Parallelogram Consecutive Angles Conjecture

The consecutive angles of a parallelogram are supplementary .



C-46 Parallelogram Opposite Sides conjecture

The opposite sides of a parallelogram are congruent.

