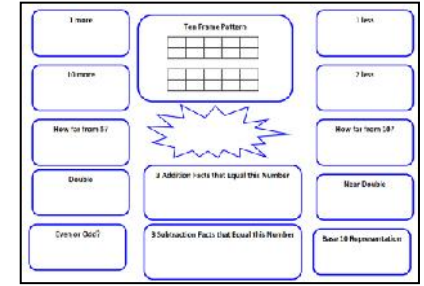


Number Relationship Mat

Materials: laminated mats, dry erase markers



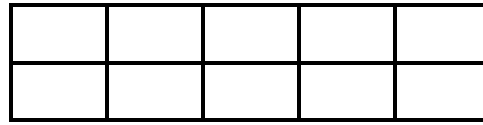
1. Work with a friend. Each of you needs to collect a mat and dry erase marker.
2. Choose a number between 6 and 20 that you will both write inside the star on your mat.
3. Fill in all the sections on your mats.
4. Compare your mats. What is the same about your mats? What is different?

1 more

Ten Frame Pattern

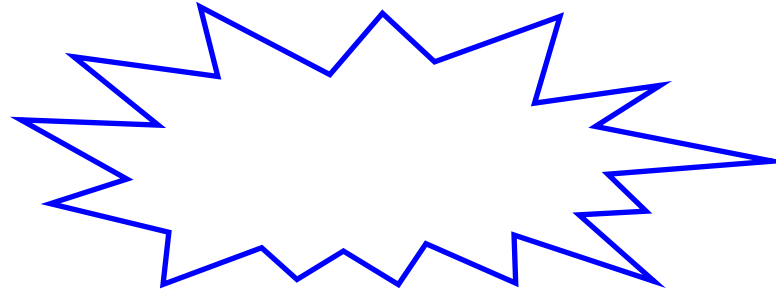
1 less

10 more



2 less

How far from 5?



How far from 10?

Double

3 Addition Facts that Equal this Number

Near Double

Even or Odd?

3 Subtraction Facts that Equal this Number

Base 10 Blocks